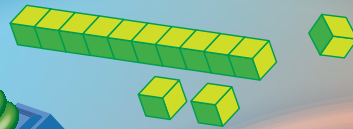



New wave mental maths

A



1. Colour and say.

0, 1, 2, 3, 4, 5, 6, 7, 8, 9

2. How many birds?



3. Colour all triangles.



4. 0, 1, 2, 3, , 5, 6, ,

5. How many dogs?




My score:

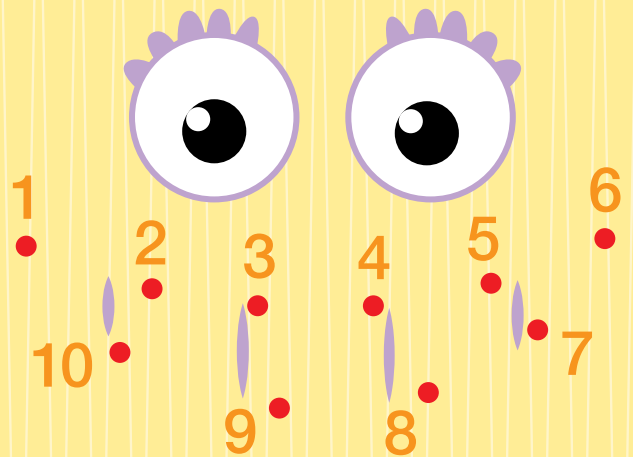
1. Colour the number of candles needed for your birthday this year.



2. Circle 4 triangles.

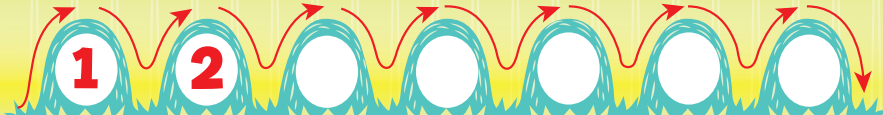


3. Join the dots.



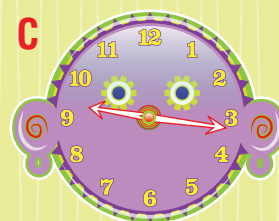
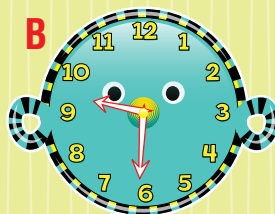
4. 0, 1, 2, 3, , 5, 6, , 8

My score:



1. Action Ant went up and down hills. 2. Write the numbers in each hill.

3. Which clock shows 9 o'clock?



4. Write the correct amount for each coin.



5. 0, 1, 2, 3, 4, , , 7, ,


My score:

1. Match the words and numbers.

two	3	five	6
one	2	four	5
three	1	six	4

2. 10, 9, 8, , 6, 5, , 3,

3. Draw clock hands to show 9 o'clock.



4. Which number is more than 12?



5. Shade 12 footballs.



6. Which container will hold the most?



My score:

1. The teacher will let you ride your bike in the classroom.

yes no

2. To go to Byron Bay, turn:

left right

3. To go to the Gold Coast, turn:

left right

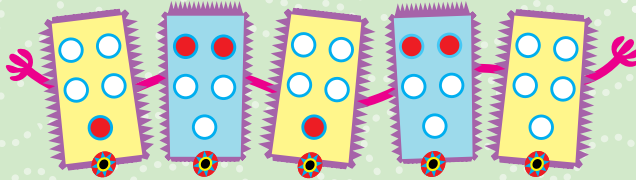
4. How many faces?




5. 10, 11, 12, , 14, , , 17, , ,

My score:

1. Finish the pattern.



6. 20, 19, 18, , ,




7. Today is

3. , 1, , 3, , 5, ,

4. 11, , 9, 8, , 6, ,



My score:



5. Shade 12 cakes.



1. Which clock shows 5 o'clock?

2. 17, 18, 19, , ,

3. 22, 21, 20, , ,

4. Today is

6. How many petals are there?



My score:

1. Mum's Home Cafe coffee caps are nearly empty. How many does she need to buy to fill the tray?



2. The number before 7 is

3. The number after 7 is

4. (a) 6, 7, 8, , 10 (b) 16, 17, 18, , 20 (c) 26, 27, 28, , 30

5. Match.

seven

nine

eight

8

7

9

6. Which number is less than 8?



7. Which number is more than 10?



8. Join the dots.



My score:


A



B




C



- Which book is the most expensive? (A, B or C)
- Which book is the cheapest?
- Match the coins to the book price.

- Which book is the biggest?
- Which book is the smallest?
- Yesterday was



My score:

- The teacher will let you ride your pet camel in the classroom! It:

will happen

won't happen

- Match.

one	2
two	3
three	1




- Finish the pattern.



- Which flag is:

(a) wider?

(b) taller?




- Complete.

(a)	5	6		8		10
(b)	15	16		18		20
(c)		16	17	18		
(d)		26	27	28		30

My score:


1. Shade half of each shape.



2. What is the time?

(a) 12 o'clock

(b) 3 o'clock



3. The Tick Tock Company makes clocks every day but not on the weekends. How many days a week does it make clocks?

4. Which has more legs?

(a) emu

(b) echidna

(c) penguin

5. How many legs altogether?



My score:

1. The time is:

(a) 12 o'clock


(b) 8 o'clock



2. Which number is missing? (1-10)



3. How many rockets can you count?



,

4.

, 1, 2, 3,

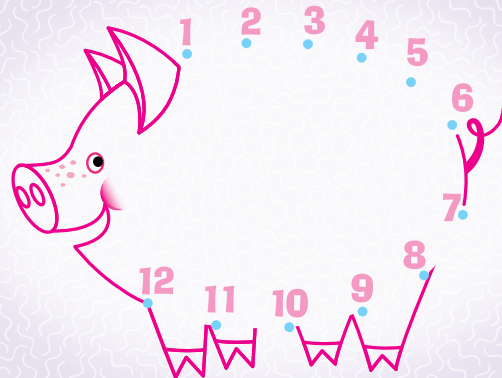
, 5, 6,

,

,

My score:

5. Join the dots.



6. One = (a) 3

(b) 2

(c) 1



- Complete the numbers on the number line bus.
- Order from smallest to largest.


8, 14, 4, 9, 11, 7 , , , , ,

- The time is:

(a) 2 o'clock

(b) 12 o'clock

(c) 1 o'clock



- Shade the numbers that are greater than 12.



- Which is a month?

(a) yesterday (b) April (c) spring

- Circle the Australian coin which has the smallest value.



My score:

- The time is: (a) 12 o'clock
(b) 4 o'clock



- The Tick Tock Company makes clocks only on the weekends. How many days a week does it make clocks?

- Shade the numbers less than 12.



- Which is a month? (a) February
(b) winter (c) Tuesday

- Count the number of boys in your class.



5. 20, 19, , 17, 16, , ,

- Count the number of girls in your class.



6. 1, , 3, , 5, , 7,

- To eat your lunch it takes about:

7. 14, , 16, , 18, , 20,

(a) 10 days

(b) 10 minutes



My score: